

Rising Third Graders - Summer Work



Reading:

Your children have grown to be great readers this year. They have gained many reading skills that will need to be practiced over the summer to ensure retention. Thus, it is important to keep your students reading. Summer reading can bridge the end of one school year and the beginning of the next. A good goal would be for your child to read at least 20 minutes a day.

The required reading books for summer reading are:

* Magic Tree House -**Hour of the Olympics** – by Mary Pope Osborne

***Who Would Win** – any book from the series by Jerry Pallotta

Students will need to have read these books before school starts and be ready to test on them when they return to school in August. These books can be checked out of the public library or purchased at bookstores or online.

The public library also has a great summer reading program to keep your child engaged in reading.

Summer Math:

Students **will not have** a required math packet or online lessons to complete this summer. However, we strongly suggest that you continue to have your child practice their math skills. On the back is an optional activities calendar for your child to complete.

Incoming third graders are expected to know their addition and subtraction facts, so please ensure that they continue to practice them over the break. Telling time and using money are also excellent ways to practice math during vacation time.

Other Suggestions: Adding math reviews to the weekly schedule will help keep your child's math skills sharp during the summer. Card and board games can be great ways to have fun and practice math.

Most kids love playing online games – what a great way to entice your children to work on their math skills while having some fun.

- www.funbrain.com (Grades K through 8): This popular site from Pearson Education features 25 different math games, customized to your skills level (grade).
- www.ixl.com (Pre-K through Grade 6):
- www.sheppardsoftware.com (Grades K through 8):

Free Online Videos:

* Brainpopjr.com and brainpop.com




Login name: sjcsw

Password: bpop123






- **The Khan Academy:** To view tutorial math videos, just scroll down the home page for a subject of interest.
- www.watchknow.org: There's over 2500 math tutorial videos on this site

May God bless you and your families as you begin a well-deserved, relaxing, and peaceful summer. We are looking forward to seeing your children in August.

June Problem of the Day

SUNDAY	MONDAY	TUESDAY	WEDNESDAY	THURSDAY	FRIDAY	SATURDAY
					What number is less, 2 or 10? <input type="checkbox"/>	What number is 10 less than 13? <input type="checkbox"/>
Lily and Ben have 8 apple slices. How many can they each eat if they share equally? <input type="checkbox"/>	Complete the sequence: 20, 15, 10, ____ <input type="checkbox"/>	What number is in the hundreds place: 63? <input type="checkbox"/>	There are 9 bird eggs. 2 have hatched. How many have not? <input type="checkbox"/>	$5 + 3 =$ <input type="checkbox"/>	Find the missing number: $8 + ? = 17$ <input type="checkbox"/>	What is the value of the 1 in 415? <input type="checkbox"/>
Ben had 20 candies but ate 9. How many are left? <input type="checkbox"/>	$19 - 7 =$ <input type="checkbox"/>	8 more than 5 is equal to: <input type="checkbox"/>	One nest has 6 eggs and another 8. How many are there altogether? <input type="checkbox"/>	What number is 1 less than $8 + 8$? <input type="checkbox"/>	Find the sum of 2, 8 and 6. <input type="checkbox"/>	2 more than 15 is equal to: <input type="checkbox"/>
Complete the sequence: 9, 12, 15, ____ <input type="checkbox"/>	You have 12 chickens and your neighbor has 7. How many do you have total? <input type="checkbox"/>	There are 2 soccer teams with 10 kids each. How many kids play soccer? <input type="checkbox"/>	$7 + 7 + 7 =$ <input type="checkbox"/>	What number is greater, 18 or 22? <input type="checkbox"/>	$14 + 9 =$ <input type="checkbox"/>	How many hours are in a day? <input type="checkbox"/>
What is the value of a quarter? <input type="checkbox"/>	What number is double 13? <input type="checkbox"/>	2 tens and 7 ones is equal to: <input type="checkbox"/>	2 more than 26 is equal to: <input type="checkbox"/>	$30 - 1 =$ <input type="checkbox"/>	Ben, Ann and Tom each caught 10 fish. How many did they catch in all? <input type="checkbox"/>	Sam has 12 cars and Jon has 11. How many more does Sam have? <input type="checkbox"/>

July Problem of the Day

SUNDAY	MONDAY	TUESDAY	WEDNESDAY	THURSDAY	FRIDAY	SATURDAY
						
Ben has 64 LEGOs. Tom has 82. How many more does Ben have? <input type="checkbox"/>	Complete the sequence: 12, 9, 6, ____ <input type="checkbox"/>	You have 2 apples and 2 oranges. How many pieces of fruit do you have? <input type="checkbox"/>	What is the value of the ones place in 78? <input type="checkbox"/>	What number is 4 more than 2? <input type="checkbox"/>	$35 - 28 =$ <input type="checkbox"/>	What number is in the tens place: 281 <input type="checkbox"/>
There are 18 birds in the yard. 9 are in the nest and the rest are flying. How many are flying? <input type="checkbox"/>	Complete the sequence: 40, 30, 20, ____ <input type="checkbox"/>	What is the hour shown on the clock:  <input type="checkbox"/>	How much more is 16 than 4? <input type="checkbox"/>	$3 + 4 + 6 =$ <input type="checkbox"/>	$24 - 10 =$ <input type="checkbox"/>	3 groups of 6 is equal to: <input type="checkbox"/>
Find the difference between 20 and 4. <input type="checkbox"/>	What is the value of 1 dime, 1 nickel and 2 pennies? <input type="checkbox"/>	10 less than 28 is equal to: <input type="checkbox"/>	A shelter had 25 dogs but 6 were adopted. How many dogs remain? <input type="checkbox"/>	What is the value of 2 tens? <input type="checkbox"/>	What is the difference between 28 and 7? <input type="checkbox"/>	$17 + 5 =$ <input type="checkbox"/>
7 less than 30 is equal to: <input type="checkbox"/>	3 sisters each have 8 pieces of candy. How many do they have total? <input type="checkbox"/>	Find the difference between 75 and 50. <input type="checkbox"/>	$18 + 8 =$ <input type="checkbox"/>	Ann spent 7 minutes putting on sunscreen and 20 minutes swimming. How long did she spend total? <input type="checkbox"/>	10 red crayons plus 10 blue crayons plus 3 green crayons equals how many crayons? <input type="checkbox"/>	What is the value of 1 quarter and 4 pennies? <input type="checkbox"/>
$12 + 10 + 8 =$ <input type="checkbox"/>	8 less than 39 is equal to: <input type="checkbox"/>					